

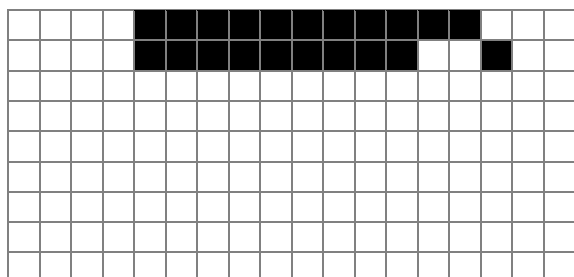



O QUE SERÁ?


1) Quantos quadrados brancos?



2) Quantos quadrados pretos?



4, 11 (4 brancos e 11 pretos)
 4, 9, 2, 1 (4 brancos, 9 pretos, 2 brancos, 1 preto)
 4, 9, 2, 1
 4, 11
 4, 9
 4, 9
 5, 7
 0, 17
 1, 15



6, 5, 2, 3
 4, 2, 5, 2, 3, 1
 3, 1, 9, 1, 2, 1
 3, 1, 9, 1, 1, 1
 2, 1, 11, 1
 2, 1, 10, 2
 2, 1, 9, 1, 1, 1
 2, 1, 8, 1, 2, 1
 2, 1, 7, 1, 3, 1
 1, 1, 1, 1, 4, 2, 3, 1
 0, 1, 2, 1, 2, 2, 5, 1
 0, 1, 3, 2, 5, 2
 1, 3, 2, 5



6, 6
 5, 1, 2, 2, 2, 1
 6, 6
 4, 2, 6, 2
 3, 1, 10, 1
 2, 1, 12, 1
 2, 1, 3, 1, 4, 1, 3, 1
 1, 2, 12, 2
 0, 1, 16, 1
 0, 1, 6, 1, 2, 1, 6, 1
 0, 1, 7, 2, 7, 1
 1, 1, 14, 1
 2, 1, 12, 1
 2, 1, 5, 2, 5, 1
 3, 1, 10, 1
 4, 2, 6, 2
 6, 6